

# At the shops

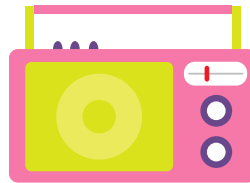
Choose 3 of these items.

How much will it cost you to buy them?


What change will you be given if you pay with  
£10.00?




£1.20



£7.50



50p



30p



80p



£2.00



£5.00



£4.50

